

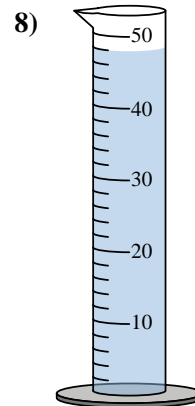
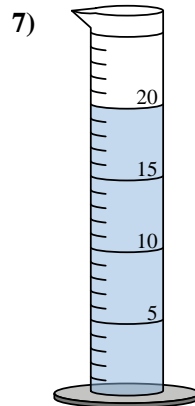
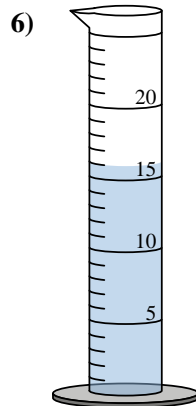
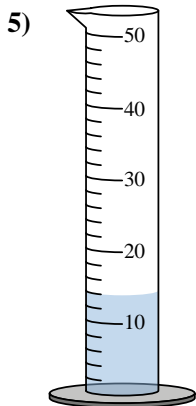
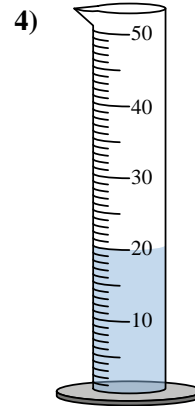
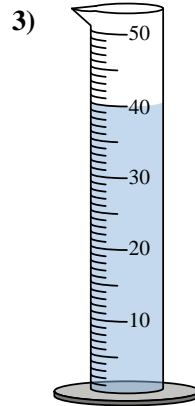
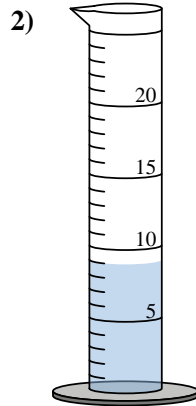
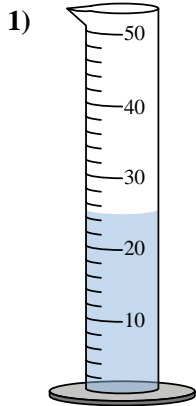


## Graduated Cylinders

Name: \_\_\_\_\_

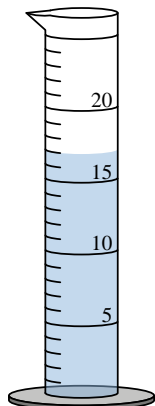
Determine how much liquid is in each graduated cylinder.

### Answers

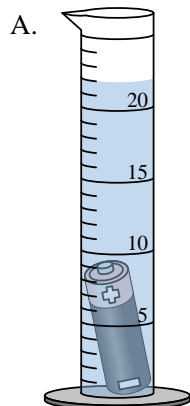


1. \_\_\_\_\_
2. \_\_\_\_\_
3. \_\_\_\_\_
4. \_\_\_\_\_
5. \_\_\_\_\_
6. \_\_\_\_\_
7. \_\_\_\_\_
8. \_\_\_\_\_
9. \_\_\_\_\_
10. \_\_\_\_\_

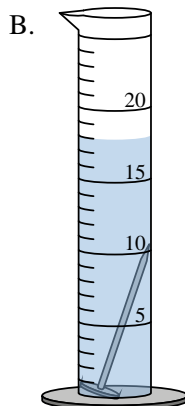
Four different objects were placed in a graduated cylinder 1 at a time:



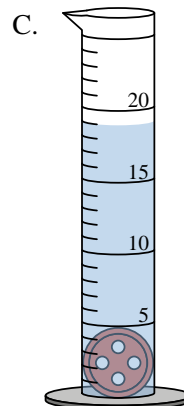
Empty



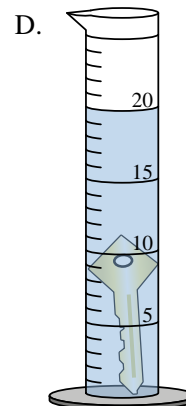
battery



nail



button



key

- 9) Which object had the greatest volume?  
10) Which object had the least volume?